

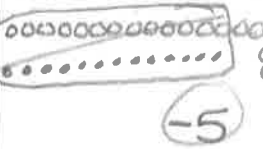
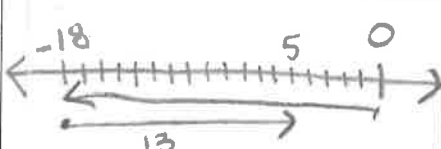





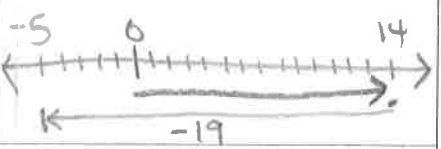



Model the following using a chip model and number line model.

	Chip model	Number line model
1. $-4 + 12$	 <p style="text-align: center;">(8)</p>	
2. $-18 + 13$	 <p style="text-align: center;">(-5)</p>	
3. $-11 + -5$	 <p style="text-align: center;">(-16)</p>	
4. $13 + -6$	 <p style="text-align: center;">(7)</p>	
5. $14 + -19$	 <p style="text-align: center;">(-5)</p>	
6. $-3 + -12$	 <p style="text-align: center;">(-15)</p>	