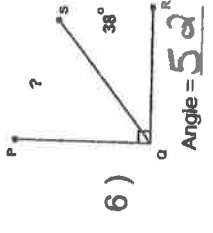
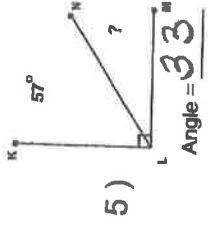
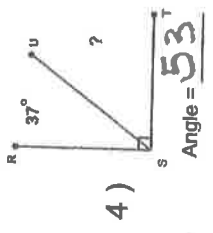
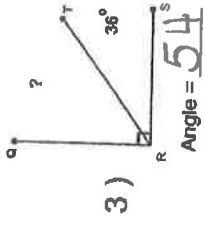
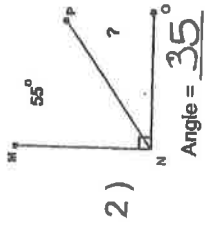
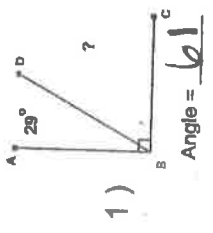
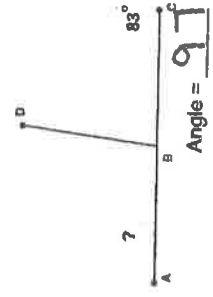
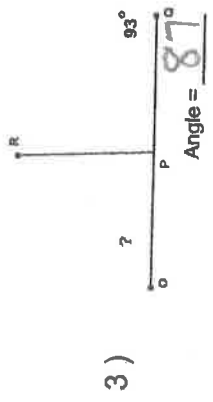
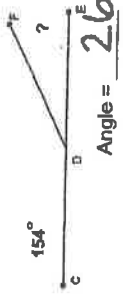
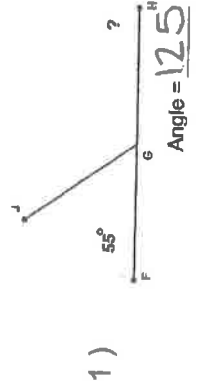


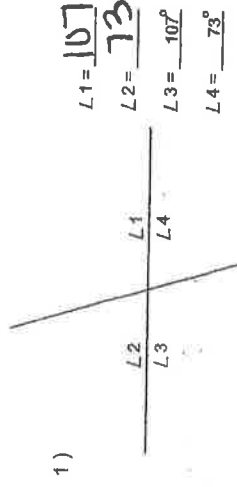
Find the missing angle measurement in each set of complementary angles.



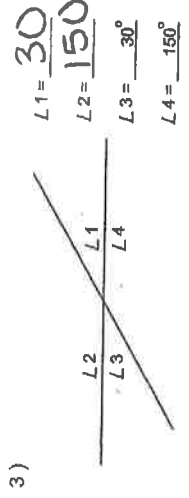
Find the missing angle measurement in each set of supplementary angles.



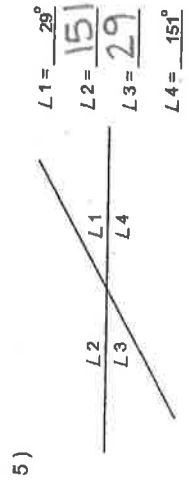
Find the missing vertical angles.



2)   
 L1 = 145  
 L2 = 35  
 L3 = 145  
 L4 = 35



4)   
 L1 = 25  
 L2 = 155  
 L3 = 25  
 L4 = 155



6)   
 L1 = 32  
 L2 = 148  
 L3 = 32  
 L4 = 148